






There were 15 pirates on the shore. They got into 3 boats. Now there are 12 pirates in all in the first boat and second boat. There are 8 pirates in all in the second boat and third boat. How many pirates are in each boat?

**First****Second****Third**


Melanie put 17 Fruit Dinos into 3 bags. Now there are 8 dinos in all in the first bag and second bag. There are 16 dinos in all in the second bag and third bag. How many dinos are in each bag?



First



Second



Third

Jerry had 18 pennies. He made 3 piles of pennies. Now there are 16 pennies in all in the first pile and second pile. There are 7 pennies in all in the second pile and third pile. How many pennies are in each pile?